

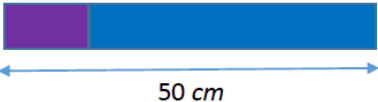



Lesson	We hope you are all well! We are missing you all and hope to see you soon.													
Maths	<p>Have a go at these measurement problems</p> <div><p>Compare the measurements using <math>&lt;</math>, <math>&gt;</math> or <math>=</math></p><table><tr><td><math>55 \text{ cm} + 10 \text{ cm}</math></td><td><input type="text"/></td><td><math>55 \text{ cm} - 10 \text{ cm}</math></td></tr><tr><td><math>42 \text{ m} + 6 \text{ m}</math></td><td><input type="text"/></td><td><math>42 \text{ m} + 7 \text{ m}</math></td></tr><tr><td><math>6 \text{ cm} - 5 \text{ cm}</math></td><td><input type="text"/></td><td><math>6 \text{ m} - 5 \text{ m}</math></td></tr><tr><td><math>80 \text{ m} - 5 \text{ m}</math></td><td><input type="text"/></td><td><math>70 \text{ m} + 5 \text{ m}</math></td></tr></table></div> <div><p>Here is a strip of purple paper.</p><p>A blue strip is four times longer than a purple strip.</p><p>The strips are joined end to end.</p><p>How long is the purple strip?</p><p>How long is the blue strip?</p></div>		$55 \text{ cm} + 10 \text{ cm}$	<input type="text"/>	$55 \text{ cm} - 10 \text{ cm}$	$42 \text{ m} + 6 \text{ m}$	<input type="text"/>	$42 \text{ m} + 7 \text{ m}$	$6 \text{ cm} - 5 \text{ cm}$	<input type="text"/>	$6 \text{ m} - 5 \text{ m}$	$80 \text{ m} - 5 \text{ m}$	<input type="text"/>	$70 \text{ m} + 5 \text{ m}$
$55 \text{ cm} + 10 \text{ cm}$	<input type="text"/>	$55 \text{ cm} - 10 \text{ cm}$												
$42 \text{ m} + 6 \text{ m}$	<input type="text"/>	$42 \text{ m} + 7 \text{ m}$												
$6 \text{ cm} - 5 \text{ cm}$	<input type="text"/>	$6 \text{ m} - 5 \text{ m}$												
$80 \text{ m} - 5 \text{ m}$	<input type="text"/>	$70 \text{ m} + 5 \text{ m}$												
Writing		<p>Read the start of this story. How will it end?</p> <p>Describe the magical creatures and animals that came to life at the end.</p> <p>In the garden of life, nothing was quite as it seemed...</p> <p>During the day, everything was peaceful. In fact, the garden was completely silent. The lady of the garden seemed to be sleeping. She lay there all day.</p> <p>Then, as the sun began to set and darkness crept over the garden, an enormous, green eyelid suddenly opened. She was awake...</p>												



## Captain Tom Moore

Captain Tom Moore is famous around the world because of all the money he has raised for the National Health Service (NHS).

### Who Is Captain Tom Moore?

Captain Tom is an ex-soldier from Bedfordshire. He was born in Yorkshire and when he was younger, he was in the army and even fought in the Second World War.



### Raising Money



Captain Tom decided to raise money for the NHS to say thank you to them. He spent some time in hospital a few years ago when he had a hip operation. He set himself the challenge of walking 100 laps around his garden before his 100<sup>th</sup> birthday on 30<sup>th</sup> April 2020.

### Why Is He Famous?

Captain Tom set himself a target of £1000, but he reached this in one day. As word quickly spread about what he was doing, people around the world decided to donate money.

So far, he has raised over 27 million pounds!

Captain Tom, who walks with a walking frame, reached 100 laps two weeks before his 100<sup>th</sup> birthday. Soldiers formed a guard of honour for his last few laps.

### Did You Know...?

Thousands of people have sent him birthday cards to say well done.

4. What was captain Tom's job?

5. How much has captain Tom raised?

1. Why did Captain Tom want to raise money for the NHS? Tick **one**.

- ☐ To say thank you
- ☐ To say happy birthday
- ☐ To say well done

2. What was Captain Tom's challenge? Tick **one**.

- ☐ To run 100 laps
- ☐ To read 100 books
- ☐ To walk 100 laps

3. Number the events to show the order in which they happened

- ☐ Captain Tom finished his 100 laps
- ☐ Captain Tom set himself a challenge
- ☐ Captain Tom's 100<sup>th</sup> birthday